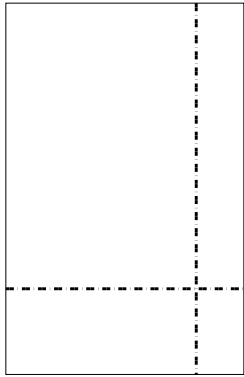





Use the array provided to solve each problem.


1) $39 \times 25 =$



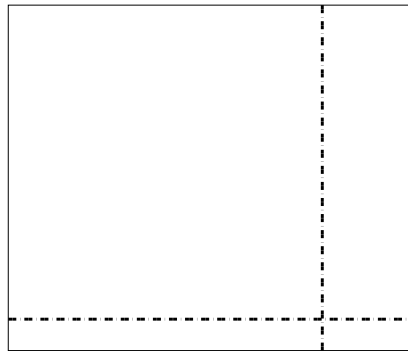
2) $34 \times 27 =$




3) $32 \times 44 =$



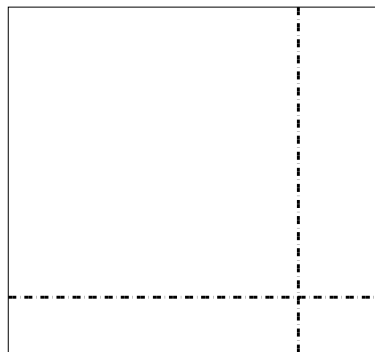
4) $33 \times 39 =$



5) $39 \times 22 =$



6) $36 \times 39 =$



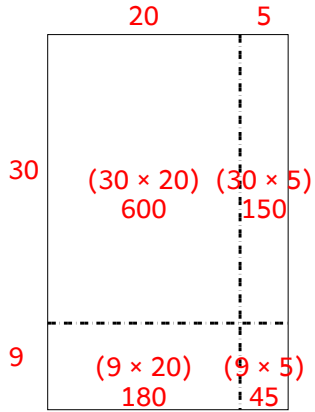
Answers

- 1. _____
- 2. _____
- 3. _____
- 4. _____
- 5. _____
- 6. _____

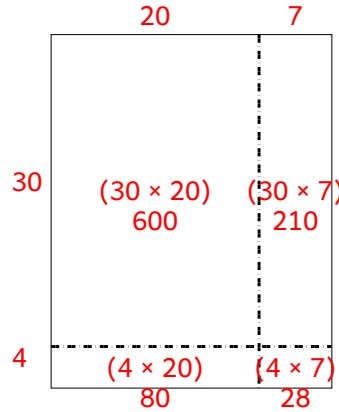


Use the array provided to solve each problem.

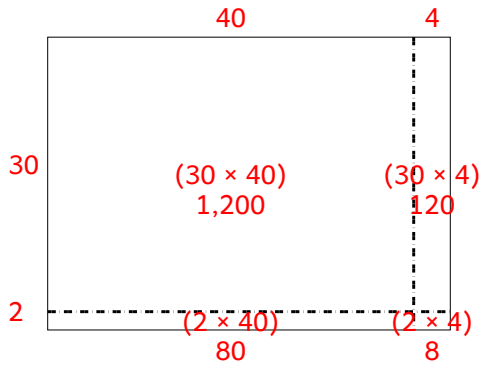
1) $39 \times 25 =$



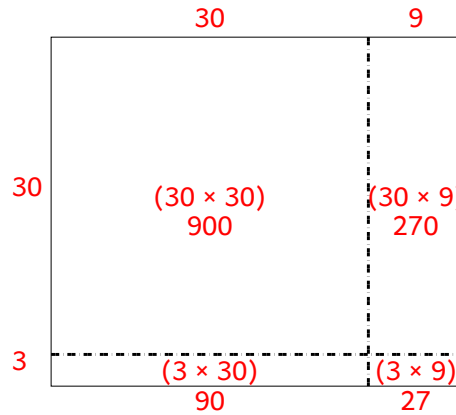
2) $34 \times 27 =$



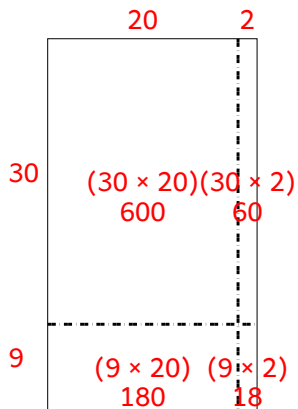
3) $32 \times 44 =$



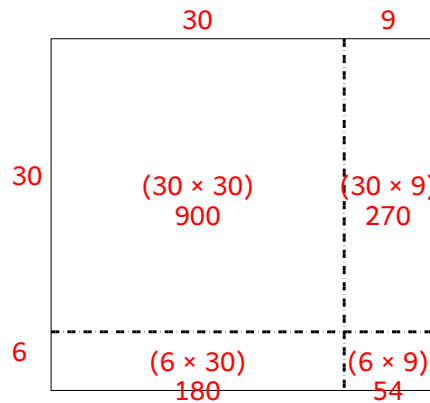
4) $33 \times 39 =$



5) $39 \times 22 =$



6) $36 \times 39 =$



Answers

1. 975
2. 918
3. 1,408
4. 1,287
5. 858
6. 1,404